

# Course Updates

<http://www.phys.hawaii.edu/~varner/PHYS272-Spr10/physics272.html>

Reminders:

1) Assignment #10 → due next Wednesday

2) Midterm #2 take-home Friday

3) Quiz # 5 next week

4) Inductance, Inductors, RLC

# Mutual Inductance

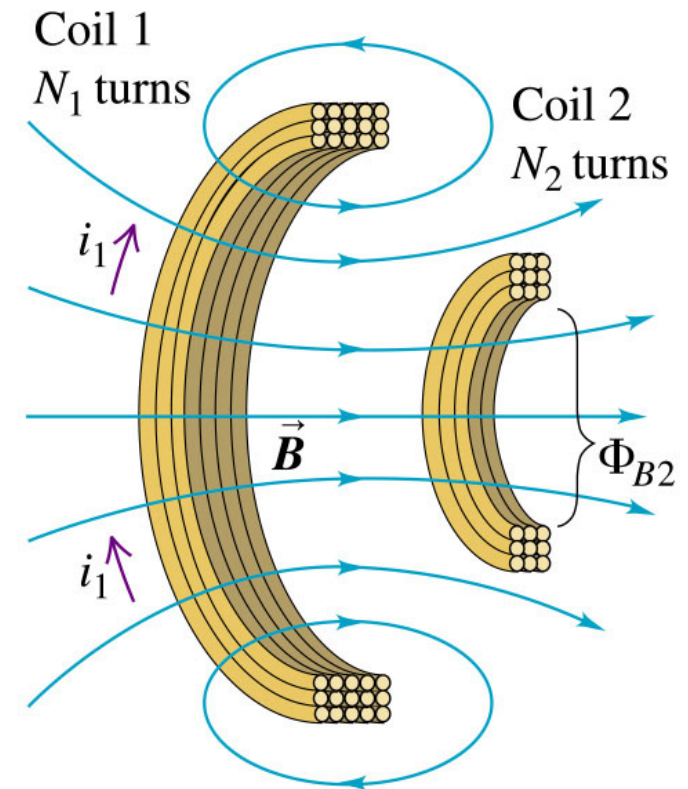
If we have a constant current  $i_1$  in coil 1, a constant magnetic field is created and this produces a constant magnetic flux in coil 2. Since the  $\Phi_{B2}$  is constant, there NO induced current in coil 2.

If current  $i_1$  is time varying, then the  $\Phi_{B2}$  flux is varying and this induces an emf  $\varepsilon_2$  in coil 2, the emf is

$$\varepsilon_2 = -N_2 \frac{d\Phi_{B2}}{dt}$$

We introduce a ratio, called **mutual inductance**, of flux in coil 2 divided by the current in coil 1.

$$M_{21} = \frac{N_2 \Phi_{B2}}{i_1}$$



Education, Inc., publishing as Addison Wesley.

# Mutual Inductance

mutual inductance,  $M_{21} = \frac{N_2 \Phi_{B2}}{i_1}$ , can now be used in Faraday's eqn

$$M_{21} i_1 = N_2 \Phi_{B2}$$

$$M_{21} \frac{di_1}{dt} = N_2 \frac{d\Phi_{B2}}{dt} = -\varepsilon_2; \quad \varepsilon_2 = -M_{21} \frac{di_1}{dt}$$

We can also the varying current  $i_2$  which creates a changing flux  $\Phi_{B1}$  in coil 1 and induces an emf  $\varepsilon_1$ . This is given by a similar eqn.

$$\varepsilon_1 = -M_{12} \frac{di_2}{dt}$$

It can be shown (*we do not prove here*) that,  $M_{12} = M_{21} = M$

The units of mutual inductance is  $T \cdot m^2/A = \text{Weber}/A = \text{Henry}$

(after the Joseph Henry)

# Mutual Inductance

The induced emf,

$$\varepsilon_1 = -M \frac{di_2}{dt}$$

has the following features;

- The induced emf opposes the magnetic flux change
- The induced emf increases if the currents changes very fast
- The induced emf depends on  $M$ , which depends only the geometry of the two coils and not the current.
- For a few simple cases, we can calculate  $M$ , but usually it is just measured.

## Problem 30.1

Two coils have mutual inductance of  $3.25 \times 10^{-4}$  H. The current in the first coil increases at a uniform rate of 830 A/s .

- A) What is the magnitude of induced emf in the 2<sup>nd</sup> coil? Is it constant?
- B) suppose that the current is instead in the 2<sup>nd</sup> coil, what is the magnitude of the induced emf in the 1<sup>st</sup> coil?

$$\begin{aligned}\varepsilon_2 &= -M \frac{di_1}{dt} \\ &= -(3.25 \times 10^{-4} \text{ H})(830 \frac{\text{A}}{\text{s}}) = -0.27 \text{ V}\end{aligned}$$

$$\varepsilon_1 = -M \frac{di_2}{dt} = -0.27 \text{ V}$$

# Tesla Coil Example

Magnetic field due to coil 1 is

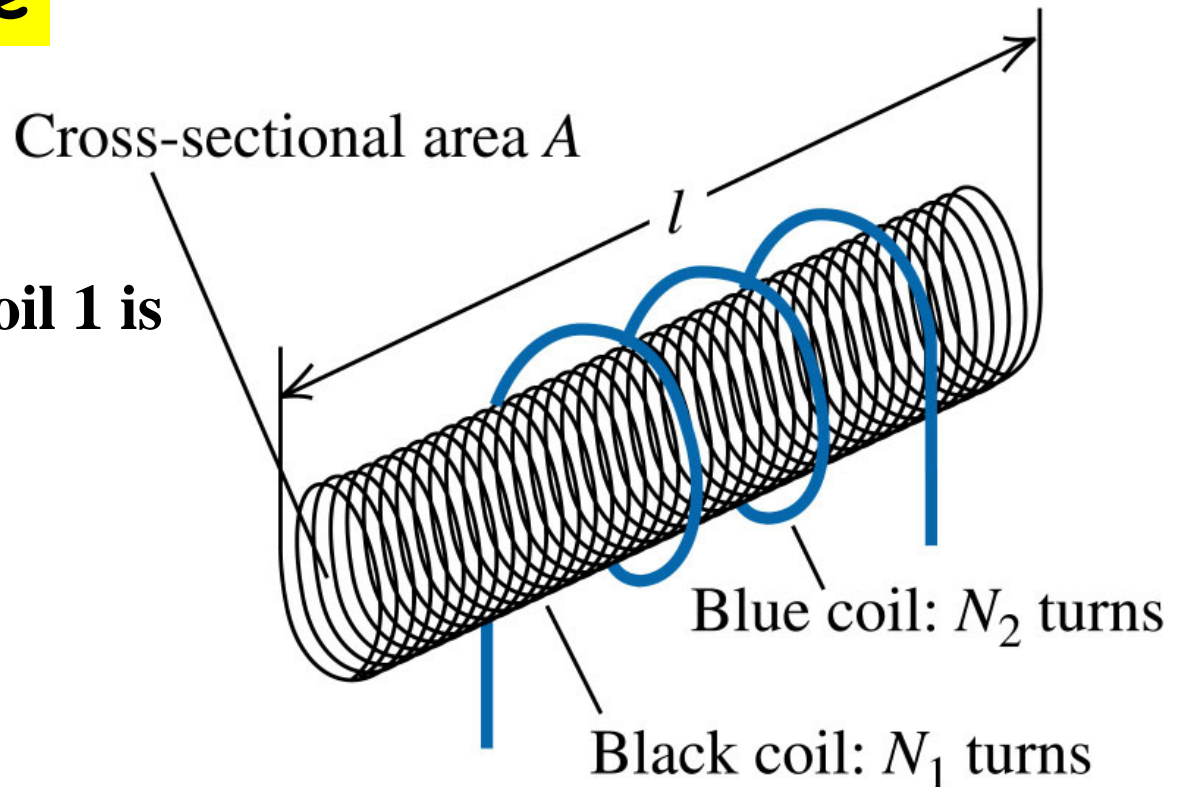
$$B_1 = \mu_0 n_1 i_1 = \mu_0 N_1 i_1 / l$$

Mutual inductance is,

$$\begin{aligned} M &= \frac{N_2 \Phi_{B2}}{i_1} = \frac{N_2 B_1 A}{i_1} \\ &= \frac{N_2 \mu_0 N_1 i_1 A}{i_1 l} = \frac{\mu_0 N_1 N_2 A}{l} \end{aligned}$$

The induced emf in coil1 from coil2 is

$$\varepsilon_1 = -M \frac{di_2}{dt} = -\frac{\mu_0 N_1 N_2 A}{l} \frac{di_2}{dt}$$



# Applications of Mutual Inductance

- **Transformers (still to come)**

- Change one AC voltage into

- **Airport Metal Detectors**

- Pulsed current → pulsed magnetic field

- Induces emf in metal

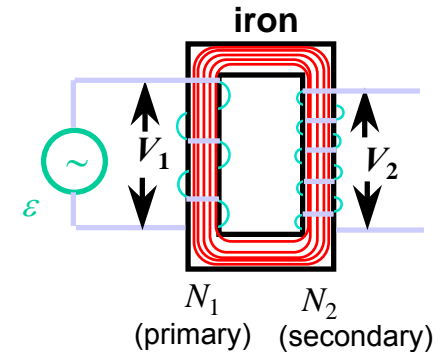
- Ferromagnetic metals “draw in” more B

- larger mutual inductance → larger emf

- Emf → current (how much, how long it lasts, depends on the resistivity of the material)

- Decaying current produces

$$V_2 = \frac{N_2}{N_1} V_1$$



# Applications of Mutual Inductance

- **Pacemakers**

- It's not easy to change the battery
- Instead, use an external AC

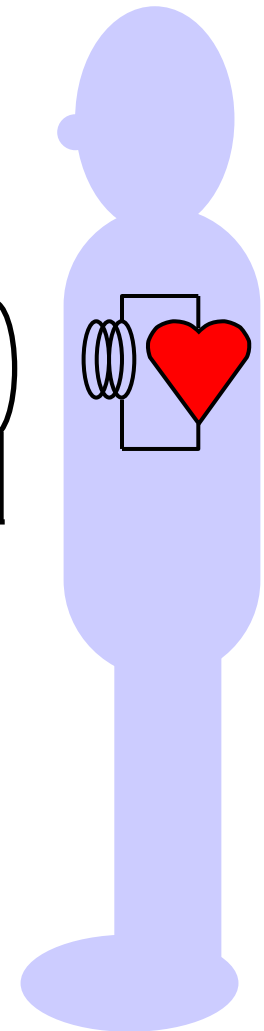
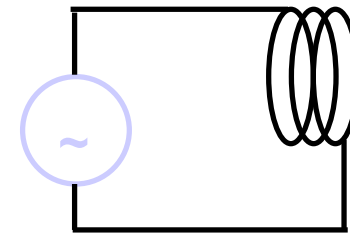


- **Alternating current**

- alternating  $B$

- alternating  $\Phi_B$  inside “wearer”

- induces AC current to power pacemaker






# Applications of Mutual Inductance




Upon leaving the hospital with his new pacemaker, Herman realizes that batteries are NOT included.



## Nicolai Tesla (1856-1943)

Born in Croatia, graduated from University of Prague. Arrived in New York with 4cents and went to work for Edison. Tesla invented polyphase alternating-current system, induction motor, alternating-current power transmission, Tesla coil transformer, wireless communication, radio, and fluorescent lights. He set up a Tesla coil in



Colorado Springs in 1899, below is a photo of this lab. He lighted lamps 40Km away. He also claimed to receive messages from another planet!! In honor of his contributions to electromagnetic phenomena, the Magnetic field intensity was named in units of “Tesla”

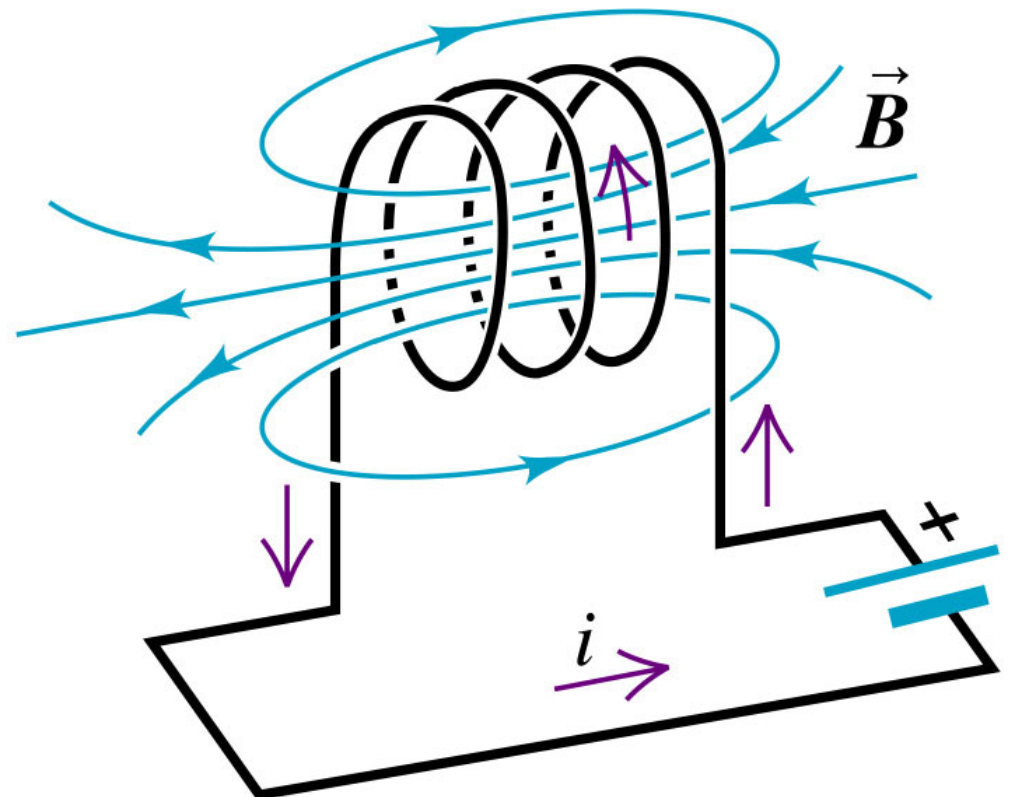
# Self Inductance

We previously considered induction between 2 coils. Now we consider the situation where a single isolated coil induces emf on itself. This is called "back emf" and if the current changes, there is a self induced emf that opposes the change in current. We form the same ratio, now called Self-Inductance,  $L$ ,

$$L = \frac{N\Phi_B}{i}$$

and we have the back emf,

$$\mathcal{E} = -L \frac{di}{dt}$$

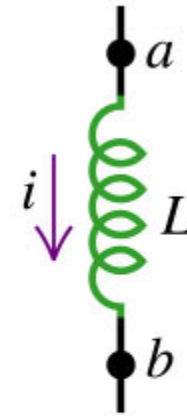


# Behavior of isolated coil in circuits



$$V_{ab} = iR$$

Resistor with current  $I$  has potential drop,  $V=iR$  from a to b



$$V_{ab} = L \frac{di}{dt}$$

Coil with

- a) constant current  $i$  has NO Voltage drop
- b)  $di/dt > 0$ , potential decreases from a to b,  $V=Ldi/dt$
- c)  $di/dt < 0$ , potential increases from a to b,  $V=-L|di/dt|$

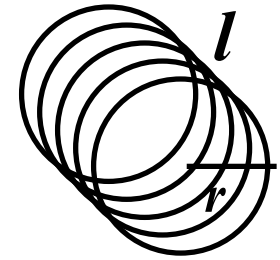
Remember, emf in coil opposes current change.

# Self inductance of long solenoid

- **Long Solenoid:**

*N* turns total, radius *r*, Length *l*

$$r \ll l \Rightarrow B = \mu_0 \frac{N}{l} I$$



*N* turns

For a single turn,  $A = \pi r^2 \Rightarrow \phi = BA = \mu_0 \frac{N}{l} I \pi r^2$

The flux through a turn is given by:


$$\Phi_B = \mu_0 \frac{N}{l} I \pi r^2$$

Inductance of solenoid can then be calculated as:

$$L \equiv \frac{N\Phi_B}{I} = \mu_0 \frac{N^2}{l} \pi r^2 = \mu_0 \left( \frac{N}{l} \right)^2 l \pi r^2$$


## Question 1:

Two simple pieces of wire A and B are shaped into almost complete loops. The loose ends of each loop are connected to identical batteries. Assume the loops have the same total resistance, and that they do not interfere with each other.




1) Which loop has the greatest flux through it (assume the loops have the same current in them)?

- a) A
- b) B
- c) same



## Question 1:

Two simple pieces of wire A and B are shaped into almost complete loops. The loose ends of each loop are connected to identical batteries. Assume the loops have the same total resistance, and that they do not interfere with each other.



1) Which loop has the greatest flux through it (assume the loops have the same current in them)?

- a) A
- b) B
- c) same

Recall the B-field of current loop (at the center):  $B = \mu_0 I / (2R)$


The area of the loop is  $A = \pi R^2$  Flux is  $\Phi_B \equiv \int \vec{B} \cdot d\vec{S}$

$\Rightarrow$  The flux through the loop increases with  $R$ .

$\Rightarrow$  The flux through loop A is bigger than the flux through loop B.


## Question 1 (cont'd):

Two simple pieces of wire A and B are shaped into almost complete loops. The loose ends of each loop are connected to identical batteries. Assume the loops have the same total resistance, and that they do not interfere with each other.



2) Which loop has the greatest self inductance?


- a) A
- b) B
- c) same





## Question 1 (cont'd):

Two simple pieces of wire A and B are shaped into almost complete loops. The loose ends of each loop are connected to identical batteries. Assume the loops have the same total resistance, and that they do not interfere with each other.



2) Which loop has the greatest self inductance?

- a) A
- b) B
- c) same

Self inductance is defined as  
so if  $I$  is the same,  $L_A > L_B$ .

$$L \equiv \frac{\Phi_B}{I}$$

# Question 2

- Consider the two inductors shown:

– Inductor 1 has length  $l$ ,  $N$  total turns and has inductance  $L_1$ .

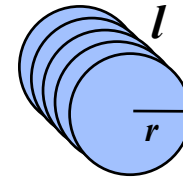
– Inductor 2 has length  $2l$ ,  $2N$  total turns and inductance  $L_2$ .

(a)  $L_2 < L_1$

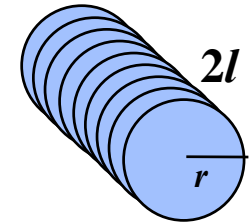
(b)  $L_2 = L_1$

(c)  $L_2 > L_1$


– What is the relation between  $L_1$  and  $L_2$ ?



$N$  turns

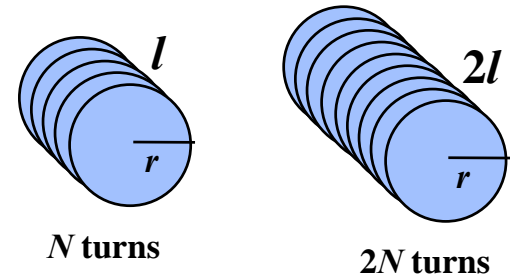


$2N$  turns



# Question 2

- Consider the two inductors shown:



– Inductor 1 has length  $l$ ,  $N$  total turns and has inductance  $L_1$ .

– Inductor 2 has length  $2l$ ,  $2N$  total turns and has

(a)  $L_2 < L_1$

(b)  $L_2 = L_1$

**(c)  $L_2 > L_1$**

- To determine the self-inductance  $L$ , we need to determine the flux  $\Phi_B$  which passes through the coils when a current  $I$  flows:  $L \equiv N \Phi_B / I$ .

- To calculate the flux, we first need to calculate the magnetic field  $B$  produced by the current:  $B = \mu_0(N/l)I$

- i.e., the  $B$  field is proportional to the number of turns per unit length.

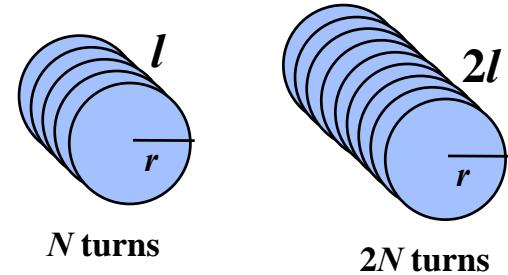
- Therefore,  $B_1 = B_2$ . But does that mean  $L_1 = L_2$ ?

# Question 2

- To calculate  $L$ , we need to calculate the flux.

- Since  $B_1=B_2$ , the flux through any given turn is the same in each inductor

- There are twice as many turns in inductor 2; therefore the net flux through inductor 2 is twice the flux through inductor 1! Therefore,  $L_2 = 2L_1$ .



**Inductors in series *add* (like resistors):**

$$L_{\text{eff}} = L_1 + L_2$$

**And inductors in parallel  
add like resistors in parallel:**

$$\frac{1}{L_{\text{eff}}} = \frac{1}{L_1} + \frac{1}{L_2}$$

## Self Inductance of toroidal solenoid

The magnetic field in a toroid was

$$B = \frac{\mu_0 Ni}{2\pi r}$$

and the net mag.flux is

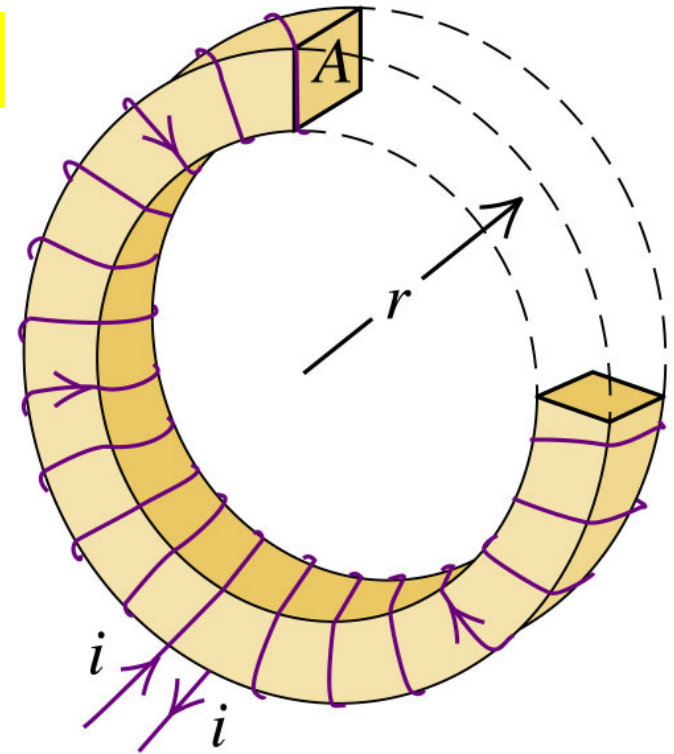
$$\Phi_B = BA = \frac{\mu_0 Ni}{2\pi r} A$$

Hence the self inductance is,

$$L = \frac{N\Phi_B}{i} = \frac{N\mu_0 Ni}{i2\pi r} A = \frac{N^2 \mu_0}{2\pi r} A$$

**Example 30.3**  $N=200$ ,  $A=5\text{cm}^2$ ,  $r=0.1\text{m}$

$$L = \frac{200^2 4\pi \times 10^{-7}}{2\pi(0.1)} 5 \times 10^{-4} = 40\mu\text{H}$$



# For next time

- Midterm 2 – take home for problems didn't get on exam [to get Scaled grade]
- Homework #10 assigned [due next Wednesday]
- Quiz next week

